



# Hydropower



**1. The names of the hydropower plants are all jumbled up. Put them in order and write them correctly.**

**P G N M P U I**

.....

**G O L W F I N**

.....

**R V E I S E R O R**

.....

**2. State whether the following statements are True (T) or False (F):**

Only water from rivers can be used to obtain hydropower.

The pumping plants only have one reservoir.

Water mills have been used since ancient times.

Reservoir water plants are the most common.

Flowing water plants don't have reservoirs.


The movements of the tides serve to produce hydropower

	T	F
Only water from rivers can be used to obtain hydropower.		
The pumping plants only have one reservoir.		
Water mills have been used since ancient times.		
Reservoir water plants are the most common.		
Flowing water plants don't have reservoirs.		
The movements of the tides serve to produce hydropower		






**Match the drawings to the correct descriptions.**




Pumping station



Flowing water plant



Water mill



Reservoir water plant

